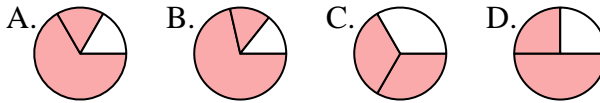




Determine which letter best represents each fraction.

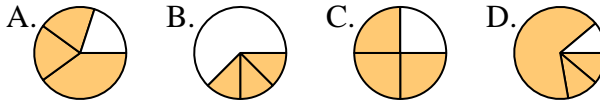
**Answers**

1) Which choice best represents  $\frac{2}{3}$ ?



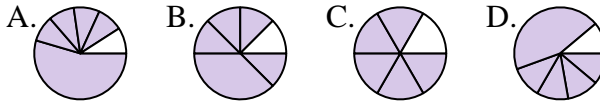
1. \_\_\_\_\_

2) Which choice best represents  $\frac{3}{4}$ ?



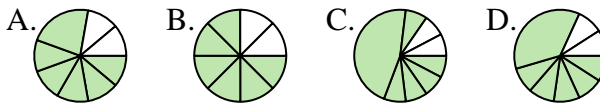
2. \_\_\_\_\_

3) Which choice best represents  $\frac{5}{6}$ ?



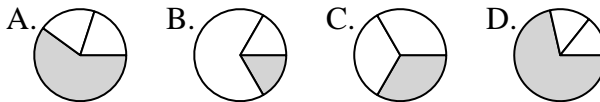
4. \_\_\_\_\_

4) Which choice best represents  $\frac{6}{8}$ ?



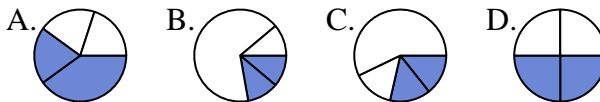
6. \_\_\_\_\_

5) Which choice best represents  $\frac{1}{3}$ ?



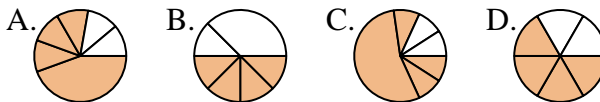
7. \_\_\_\_\_

6) Which choice best represents  $\frac{2}{4}$ ?



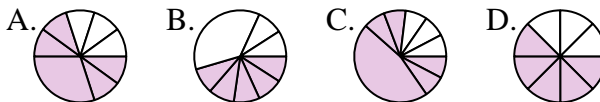
9. \_\_\_\_\_

7) Which choice best represents  $\frac{4}{6}$ ?



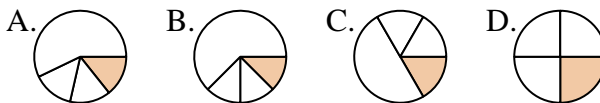
10. \_\_\_\_\_

8) Which choice best represents  $\frac{5}{8}$ ?



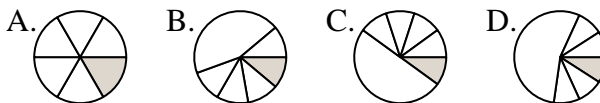
11. \_\_\_\_\_

9) Which choice best represents  $\frac{1}{4}$ ?



12. \_\_\_\_\_

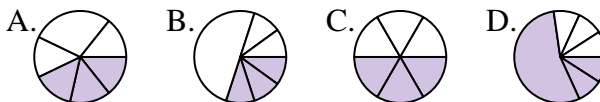
10) Which choice best represents  $\frac{1}{6}$ ?



11) Which choice best represents  $\frac{4}{8}$ ?



12) Which choice best represents  $\frac{3}{6}$ ?

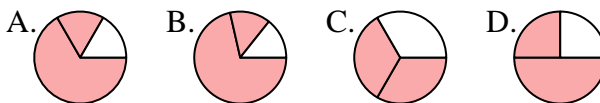




Determine which letter best represents each fraction.

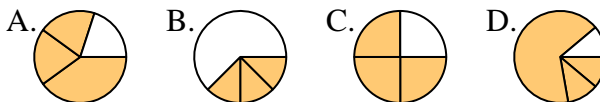
**Answers**

1) Which choice best represents  $\frac{2}{3}$ ?



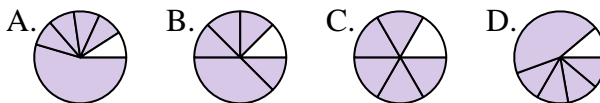
1.   **C**  

2) Which choice best represents  $\frac{3}{4}$ ?



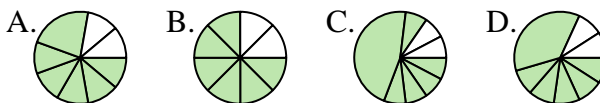
2.   **C**  

3) Which choice best represents  $\frac{5}{6}$ ?



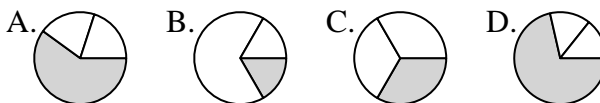
3.   **C**  

4) Which choice best represents  $\frac{6}{8}$ ?



4.   **B**  

5) Which choice best represents  $\frac{1}{3}$ ?



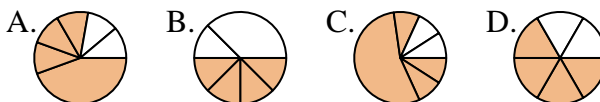
5.   **C**  

6) Which choice best represents  $\frac{2}{4}$ ?



6.   **D**  

7) Which choice best represents  $\frac{4}{6}$ ?



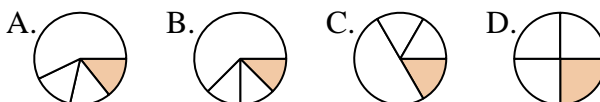
7.   **D**  

8) Which choice best represents  $\frac{5}{8}$ ?



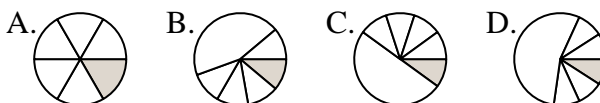
8.   **D**  

9) Which choice best represents  $\frac{1}{4}$ ?



9.   **D**  

10) Which choice best represents  $\frac{1}{6}$ ?



10.   **A**  

11) Which choice best represents  $\frac{4}{8}$ ?



11.   **A**  

12) Which choice best represents  $\frac{3}{6}$ ?



12.   **C**